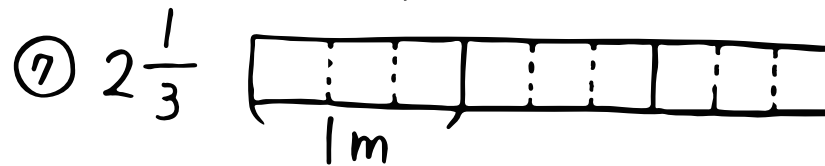
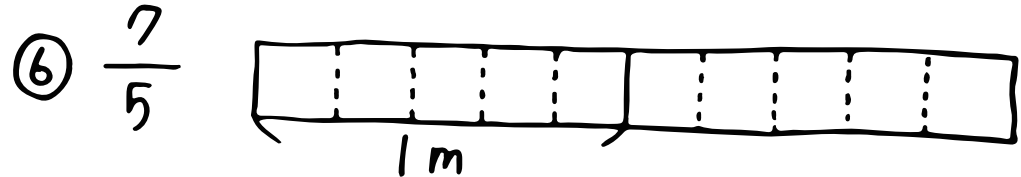


算数 (仮分数・帯分数 ①)

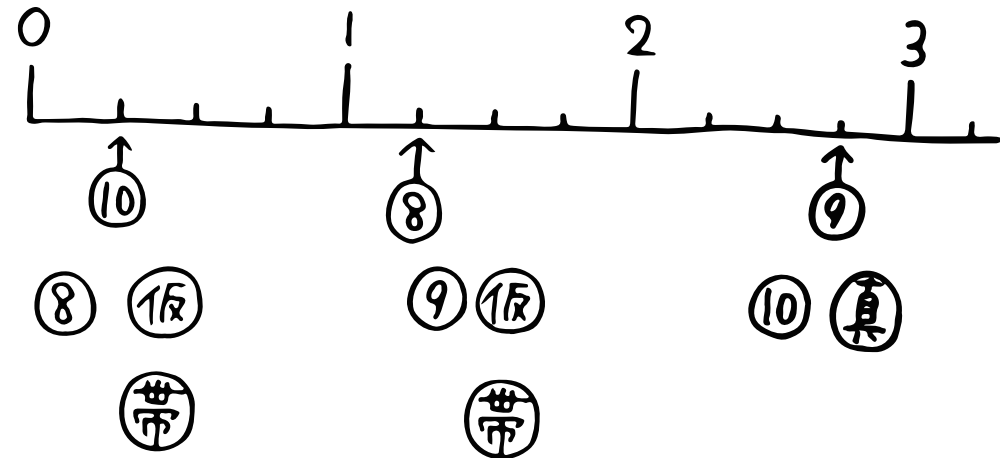
⑥ 仲間分けをしてみよう!

- | | | | | |
|---------------|----------------|----------------|---------|------------|
| $\frac{3}{5}$ | $1\frac{2}{6}$ | $\frac{6}{7}$ | } ① 真分数 | |
| $\frac{9}{4}$ | $\frac{3}{3}$ | $5\frac{1}{2}$ | | } ② 仮分数 |
| | | | | } ③ 帯分数... |

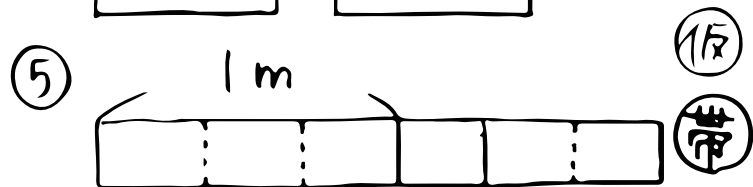
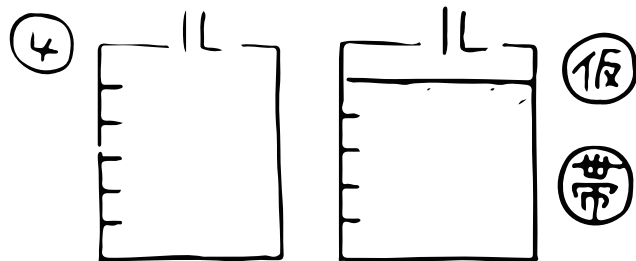
⑥ 今度はぬちやおうせ!



⑥ 最後に数直線いっよー!



⑥ ①と②で書くと?



⑥ 1がいくつに分かてる?