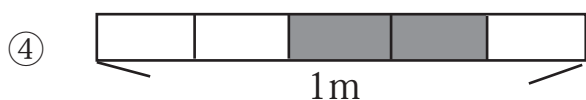
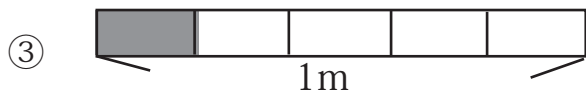
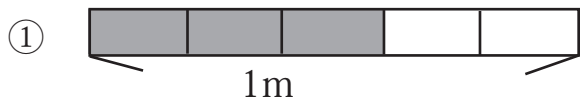
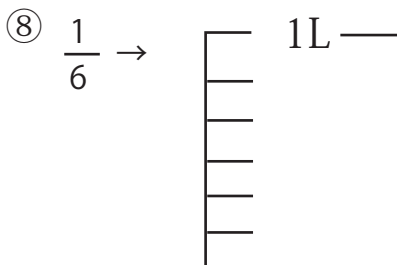
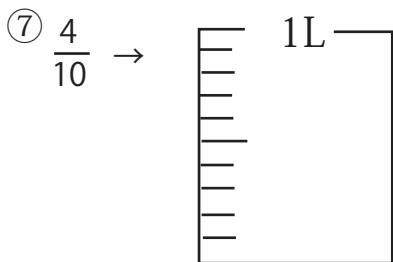
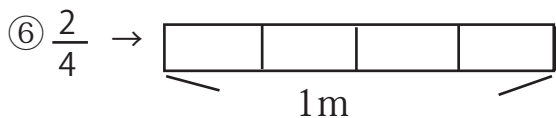
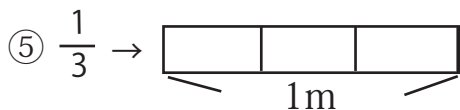


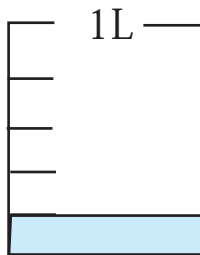
☆  は分数でなあらわすと何 m かな？



☆ ぬってみよう！



⑨ 水のかさは何 L でしょう。



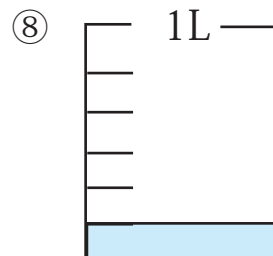
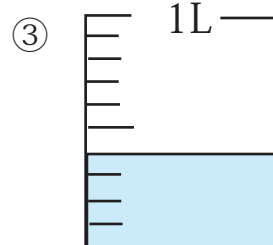
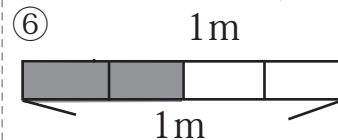
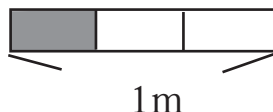
①  $\frac{3}{5}$  m

②  $\frac{2}{3}$  m

③  $\frac{1}{5}$  m

④  $\frac{2}{5}$  m

⑤



⑨  $\frac{1}{5}$  L