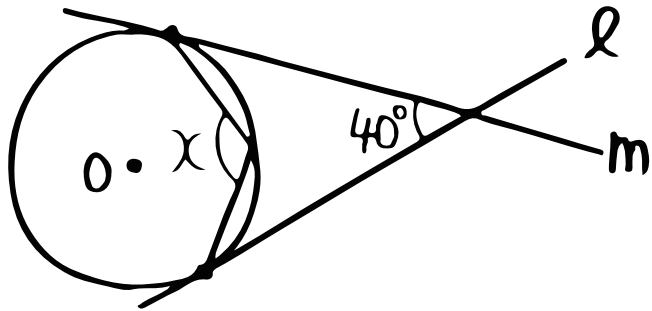


数学 (円周角の定理③・もっと応用編)

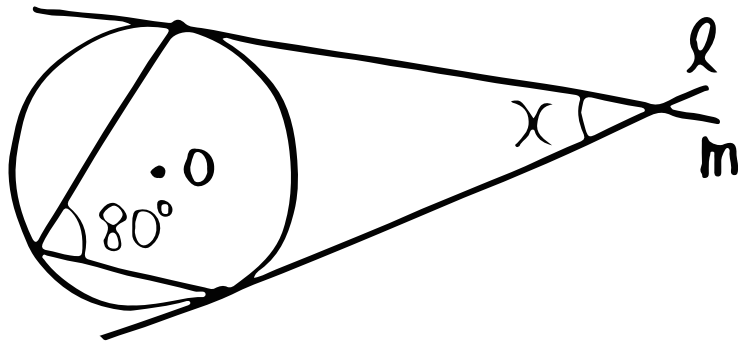
① $\angle X, \angle Y$ を求めよう!

(①, ②の l, m は円 O の接線)

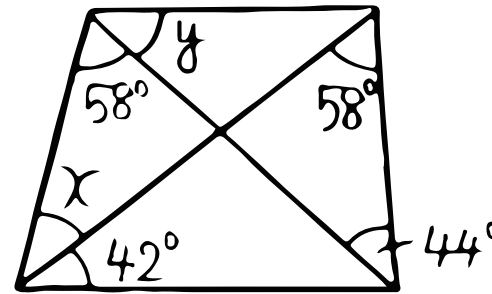
①



②



③



④ 点 A, B, C, D, E は円周を5等分する点

