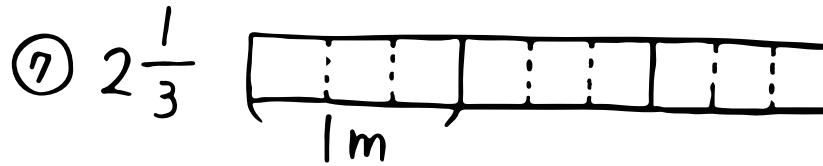
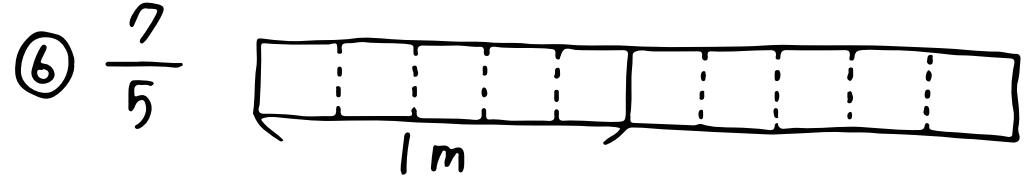


# 算数 (仮分数・帯分数①)

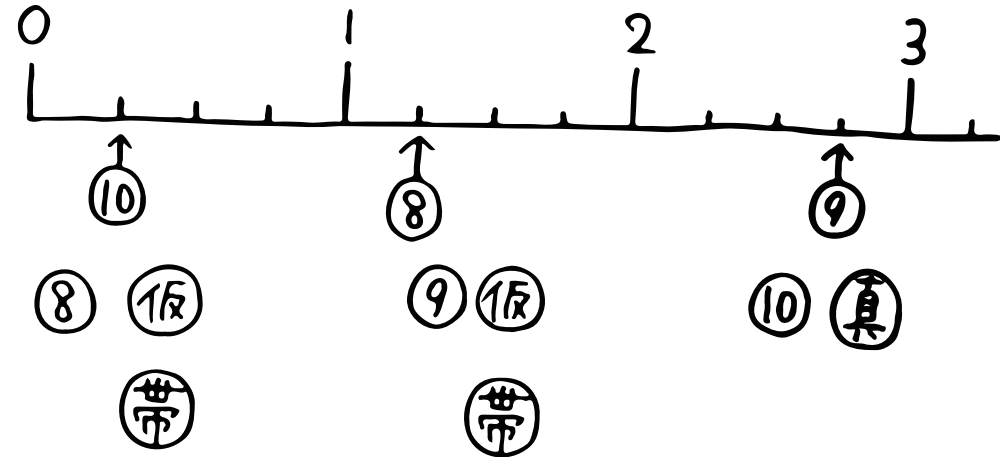
⑥ 仲間分けをしてみよう!

- |               |                |                |         |            |
|---------------|----------------|----------------|---------|------------|
| $\frac{3}{5}$ | $1\frac{2}{6}$ | $\frac{6}{7}$  | } ① 真分数 |            |
| $\frac{9}{4}$ | $\frac{3}{3}$  | $5\frac{1}{2}$ |         | } ② 仮分数    |
|               |                |                |         | } ③ 帯分数... |

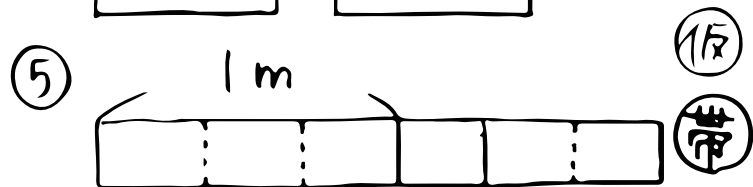
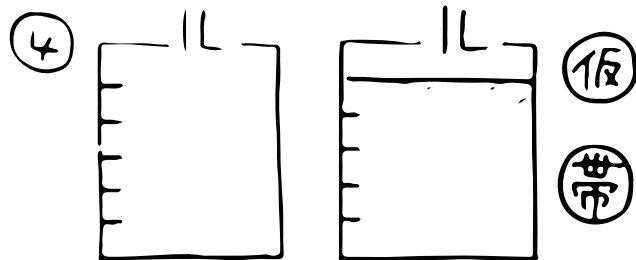
⑥ 今度はぬちやおうせ!



⑥ 最後に数直線いっよー!



⑥ ①と②で書くと?



⑥ 1がいくつに分かてる?