

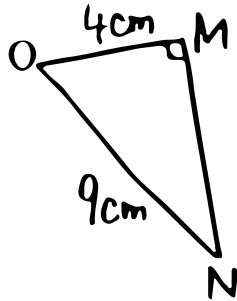
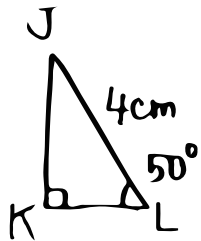
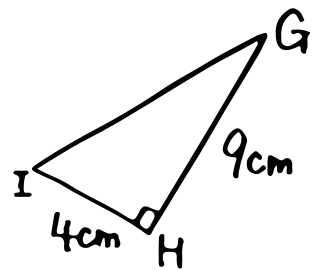
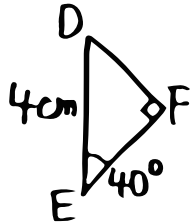
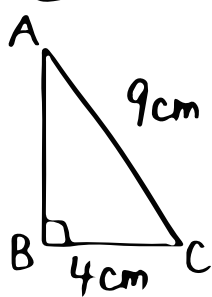
# 数学 (直角三角形の合同条件)

直角三角形の合同条件

① \_\_\_\_\_ がそれぞれ等しいとき

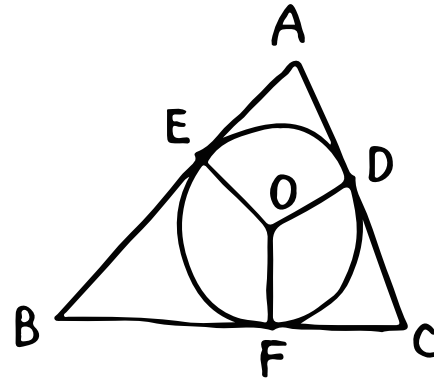
② \_\_\_\_\_ が " "

⑦ どれとどれが合同? (条件もね!)



③ \_\_\_\_\_ . \_\_\_\_\_

④ \_\_\_\_\_ . \_\_\_\_\_



円Oが辺AB, BC, CAに接しています。

⑤  $\angle ODA$ はいくつ?

⑥  $AB=12\text{cm}, BC=14\text{cm}, AE=4\text{cm}$  のとき,  $AC$ は何cm?

