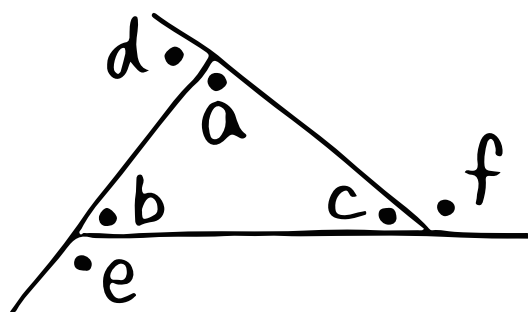


数学 (三角形の内角と外角①・基本編)

⑥



• ① _____、• ② _____ といひ、

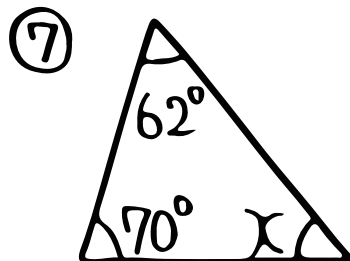
$\angle A + \angle b + \angle C = \textcircled{3}$ _____

$\angle A + \angle b = \textcircled{4}$ _____


$\angle b + \angle C = \textcircled{5}$ _____

$\angle C + \angle A = \textcircled{6}$ _____ である。

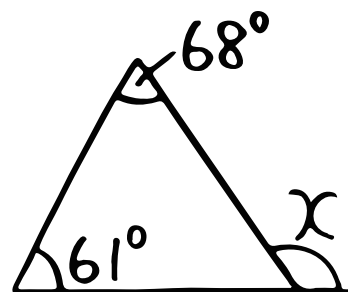
⑦ $\angle X$ 、 $\angle Y$ の大きさを求めよう!



⑨



⑧



⑩

